

Name: _____

TA# _____

WHMIS Worksheet











- 1) What does WHMIS stand for?

- 2) What is the purpose of WHMIS?

- 3) What information would you find on a WHMIS label?

- 4) Do all products and chemicals have WHMIS labels? Explain.

- 5) Identify the symbols and write down one hazard the symbol represents and give one example of a material that may have this symbol.

	Identify Symbol	One Hazard	Example
 A			
 B			
 C			
 D			
 E			
 F			
 G			
 H			
 I			
 J			