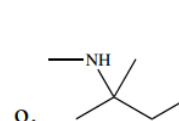
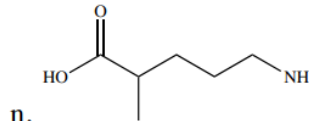
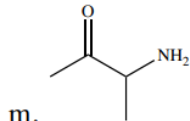
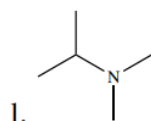
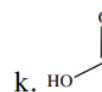
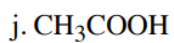
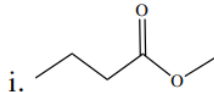
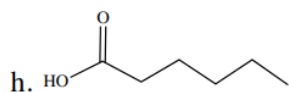
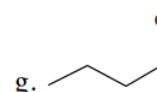
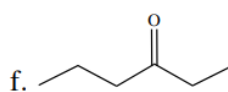
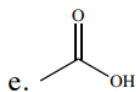
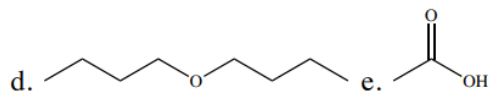
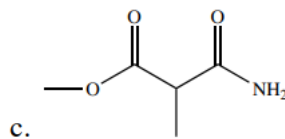
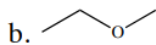
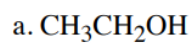


Chemistry 11: Worksheet – Functional Groups

Name: _____

Date: _____

1. For each molecule circle and name the functional group. Some molecules may have more than one functional group; in those cases, circle and name all functional groups present (ex. alcohols, ethers, aldehydes, ketones, carboxylic acids, esters, amines, and amides).



2. Draw the following structures:

